


KAS TUNNED SAAREMAA METSADE LOOMI JA LINDE ?

LOOMETS

NÕMME- JA PALUMETS

SALUMETS, PUISNIIT




A

B

C

KUS NAD ELAVAD (A, B VÕI C) ?



NIMI

A B C

ELUPAIK



NIMI

A B C


ELUPAIK



NIMI

A B C


ELUPAIK



NIMI

A B C


ELUPAIK



NIMI

A B C


ELUPAIK



NIMI

A B C

ELUPAIK



NIMI

A B C

ELUPAIK